

NAMAGUNGA PRIMARY BOARDING SCHOOL

P.3 REVISION SET (1) MAY 2020

LITERACY 1B

NAME: _____ STREAM: _____

INSTRUCTIONS:

1. Read well and answer all questions.

2. You must write well.

3. Write correct spellings.

SECTION A

1. Name any one example of useful insects.

2. Mention any one tool used to keep pit latrines clean.

3. A part from crop farming, mention any one other type of farming.

4. How is clay soil useful to a potter?

5. State one example of physical body exercises.

6. Why do birds have wings on their bodies?

7. What is a seedling?

8. Mention the animal which changes its colours for protection.

9. How is a watering can useful to a crop farmer?

The diagram below shows a tool used to keep the compound clean. Use it to answer questions 10 and 11.



10. Name the above tool.

11. How is the above tool useful when cleaning the compound?

12. What do we call a meal having all food values in their right amount?

13. Mention any one danger of accidents to people.

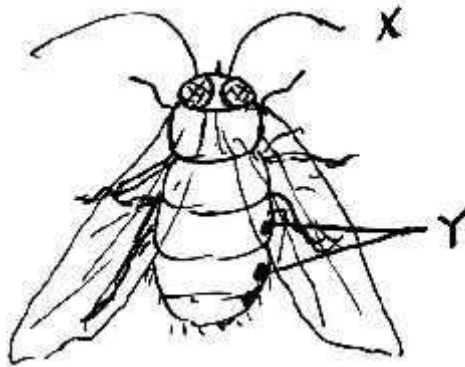
14. Why do people wear sweaters on a cold day?

15. Name any one childhood immunisable disease.

16. State any one use of food in the body.

17. How can people protect themselves from mosquito bites at night?

The diagram below shows the structure of an insect. Use it to answer questions 18 and 19.



18. Name part marked Y.

19. How is part marked Y useful to an insect?

20. Why do we need light when learning?

21. Give the best season for drying harvested seeds.

22. State one use of stones to people.

23. How can long finger nails be dangerous to a P.3 pupil?

24. Which clouds form rain?

25. Why should sick people be given fruits?

26. Apart from sun light, give one other thing we get from the sun.

27. State any one danger of having dirty teeth.

The diagram below shows the structure used to store food. Use it to answer questions 28 and 29.



28. Name the above structure.

29. Why do people keep food in the above structure?

30. Give any one condition necessary for seed germination.

31. Mention any one example of a wild bird.

32. Write one way of keeping uniforms clean.

33. Why does a bed bug produce a nasty smell when touched?

34. Name any one disease we get from eating contaminated food.

35. Apart from timber, write one other useful thing got form trees.

36. How do we keep good body posture?

37. What are food crops?

38. Why should a P.3 pupil do physical body exercises?

39. Apart from stones, mention any other example of non-living things.

40. How is water useful to people at home?

SECTION B

41. (a) What is personal hygiene?

(b) Mention any two activities done to promote personal hygiene.

(i) _____ (ii) _____

(c) Why do we bathe regularly?

42. (a) What are living things?

(b) Mention two groups of living things.

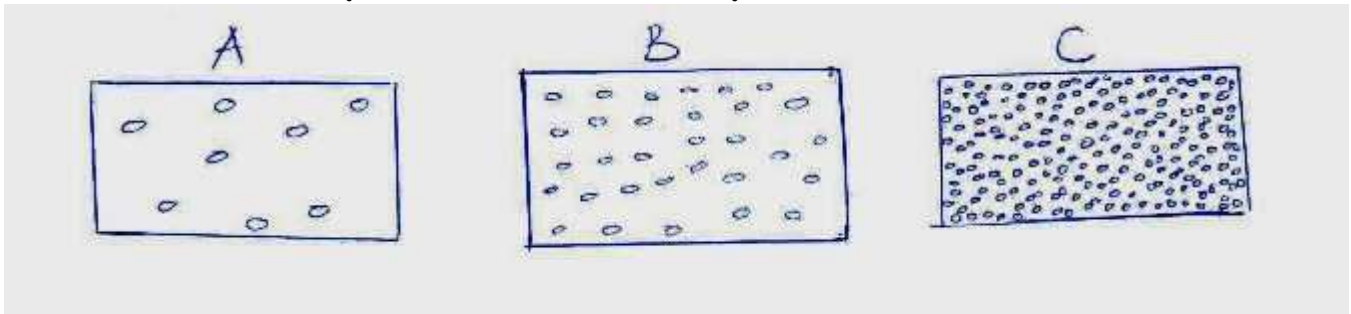
(i) _____

(ii) _____

—

(c) Why are goats called living things?

43.(a)The diagram below shows the different types of soil. Study them carefully and answer the questions that follow.



(i) Name the types of soil marked.

A _____ B _____ C _____

(b) Why is loam soil the best type of soil for growing crops?

44. (a) Apart from carbohydrates, mention any two other classes of food.

(i) _____

(ii) _____

—

(b) Mention one example of food eaten at school.

(c) Why should a P.3 child eat food everybody?

45. (a) State any two diseases which are spread by houseflies.

(i) _____

(ii) _____

—

(b) Why is it bad to live in a dirty environment?

(c) How can we keep our school environment clean?

46. (a) What do we call plants which bear flowers?

(b) Give any two plants which bear flowers.

(i) _____

(ii) _____

—

(c) Apart from flowers, give any one other part found on a plant.

47. (a) The diagram below shows a tool used to keep first aid kits. Study and use it to answer the questions that follow.



(a) Name the tool above.

(b) Mention any two examples of items kept in the above tool.(i)

_____ (ii) _____

(c) Why do we need the above tool at school?

48. Match animals in A to their ways of protection in B.

A

B

A snake

uses horns

A wasp	uses a proboscis
A mosquito	uses fangs
A cow	uses sting

Correct order

(a) A snake ; _____

(b) A wasp ; _____

(c) A mosquito; _____

(d) A cow; _____

49. (a) State two kinds of information found on the child health card.

(i) _____

(ii) _____

(b) How is a child health card useful to people who care for children?

50. (a) Mention any two examples of garden tools used by farmers.

(i) _____

(ii) _____

—

(b) How are the following garden tools useful to a crop farmer?

(i) hoe : _____

(ii) panga; _____


51. (a) What are cash crops?

(b) Write any two examples of cash crops.

(i) _____ (ii) _____

(c) Why do farmers grow cash crops?

52. The diagram below shows the parts of a bird. Study and use it to answer the questions that follow.



LO

P

(a) Name parts marked

P: _____

L: _____

O: _____

(b) How is part marked L useful to a bird?

53. (a) Mention any two examples of common diseases.

(i) _____

(ii) _____

– (b) State any two dangers of common diseases to people.

(i) _____

(ii) _____

–

54. (a) What are domestic animals?

(b) Mention any two examples of domestic animals.

(i) _____

(ii) _____

– (c) Why do animals move from one place to another?

55. (a) Which materials are used to make these crafts?

(i) pots ; _____

(ii) baskets; _____

(b) How are the above crafts useful to people?

(i) pots ; _____

(ii) baskets: _____

END